

Şekil Sayı Eşleştirme

×

= 1

□

= 0

▽

= 4

+

= 6

→

= 2

◇

= 5

☆

= 8

△

= 3

○

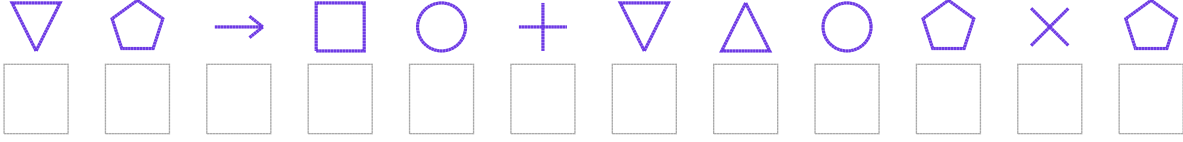
= 9

⬠

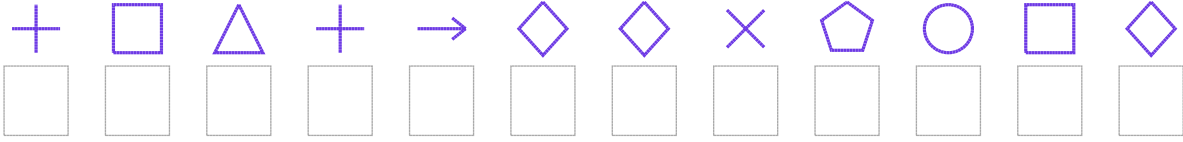
= 7

Aşağıdaki uzun şifreleri hatasız çözerek altlarına yazın:

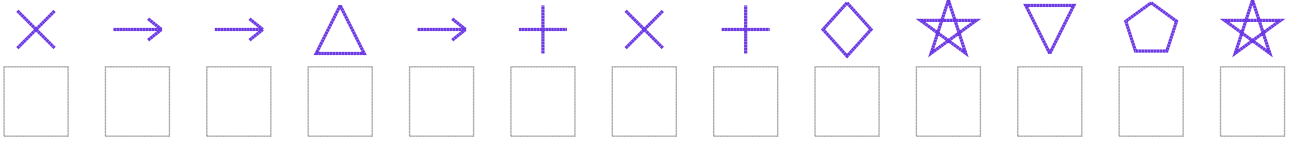
1. Şifre



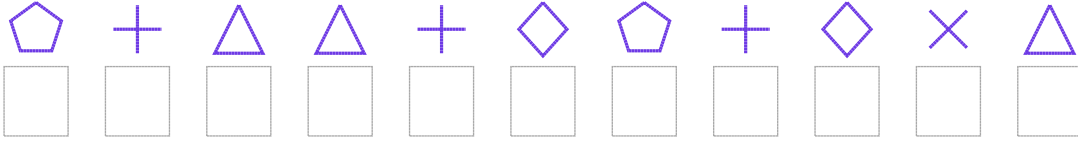
2. Şifre



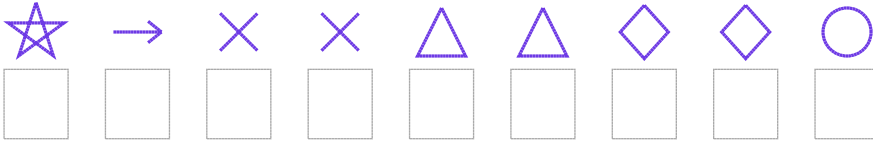
3. Şifre



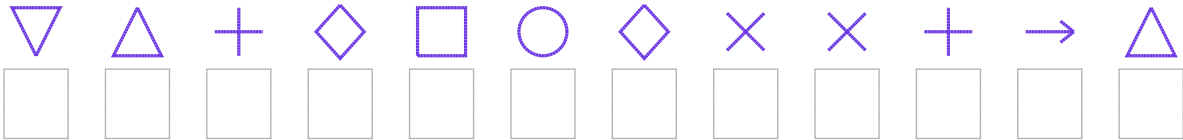
4. Şifre



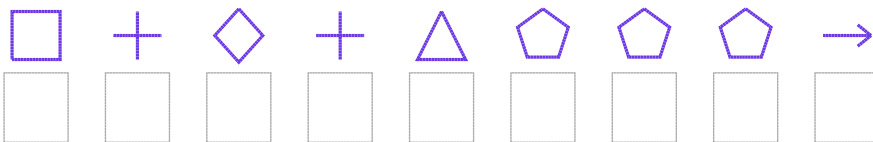
5. Şifre



6. Şifre



7. Şifre



□ BONUS: 7. ve 6. şifrenin üçüncü rakamının toplamı kaçtır?

Cevap Anahtarı

1. Şifre: 472096439717

2. Şifre: 603625517905

3. Şifre: 1223261658478

4. Şifre: 76336576513

5. Şifre: 821133559

6. Şifre: 436509511623

7. Şifre: 065637772

□ Bonus Soru Cevabı: 11